

Monday 20 June 2016 – Morning

**GCSE GATEWAY SCIENCE
CHEMISTRY B**

B742/01 Chemistry modules C4, C5, C6 (Foundation Tier)


Candidates answer on the Question Paper.
A calculator may be used for this paper.

OCR supplied materials:
None

Other materials required:

- Pencil
- Ruler (cm/mm)

Duration: 1 hour 30 minutes



Candidate forename		Candidate surname	
-----------------------	--	----------------------	--

Centre number						Candidate number				
---------------	--	--	--	--	--	------------------	--	--	--	--

INSTRUCTIONS TO CANDIDATES

- Write your name, centre number and candidate number in the boxes above. Please write clearly and in capital letters.
- Use black ink. HB pencil may be used for graphs and diagrams only.
- Answer **all** the questions.
- Read each question carefully. Make sure you know what you have to do before starting your answer.
- Write your answer to each question in the space provided. If additional space is required, you should use the lined page(s) at the end of this booklet. The question number(s) must be clearly shown.
- Do **not** write in the bar codes.

INFORMATION FOR CANDIDATES

- The quality of written communication is assessed in questions marked with a pencil (✎).
- The Periodic Table can be found on the back page.
- The number of marks is given in brackets [] at the end of each question or part question.
- The total number of marks for this paper is **85**.
- This document consists of **28** pages. Any blank pages are indicated.

Answer **all** the questions.

SECTION A – Module C4

1 Look at the table. It shows some information about three atoms.

Atom	Number of protons	Number of neutrons	Electronic structure
X	17	20	2.8.7
Y	17	18	2.8.7
Z	3	4	2.1

(a) (i) What is the **atomic number** of atom **X**?

answer

[1]

(ii) What is the **mass number** of atom **Z**?

answer

[1]

(iii) How many electron shells are occupied in atom **Y**?

answer

[1]

(b) Atoms **X** and **Y** are **isotopes**.

What is meant by isotopes?

.....

[2]

[Total: 5]

2 This question is about two Group 1 elements, sodium and potassium.

(a) Write down the name of **one other** Group 1 element.

..... [1]

(b) Sodium reacts with water.

Describe what you would **see** when sodium reacts with water.


.....
.....
.....
.....
..... [2]

(c) Potassium reacts with water.

One of the substances made is an alkali.

The other substance made burns with a 'pop'.

Complete the **word** equation for this reaction.



[2]

[Total: 5]

3 This question is about the Periodic Table.

Look at the list of elements.

aluminium

boron

bromine

helium

potassium

silver

Answer these questions.

Use the Periodic Table on the back page to help you.

Choose your answers from the list.

(a) (i) Two elements are in the same **group** of the Periodic Table.

Which two elements?

..... and [1]

(ii) Two elements are in the same **period** of the Periodic Table.

Which two elements?

..... and [1]

(iii) Write down the name of a **transition** element.

..... [1]

(b) One scientist who helped to develop the Periodic Table was called Mendeleev.

Write about how Mendeleev helped in the development of the Periodic Table.

.....
.....
.....
..... [2]

[Total: 5]

5 This question is about the Group 7 elements.

Chlorine and iodine are Group 7 elements.

(a) What is the name given to the Group 7 elements?

..... [1]

(b) (i) Write down **two** uses of chlorine.

.....
.....
..... [2]

(ii) Write down **one** use of iodine.

.....
..... [1]

[Total: 4]

SECTION B – Module C5

6 Orange squash is a concentrated solution.

It has to be diluted with water to make sure that the taste is not too strong.

(a) Some medicines and baby milk both need to be diluted before they are used.

Explain why some medicines and baby milk both need to be diluted.

.....
.....
.....
..... **[2]**

(b) Orange juice contains vitamin C.

The formula for vitamin C is $C_6H_8O_6$.

A sample of 176 g of vitamin C contains 72 g of carbon and 8 g of hydrogen.

How many grams of oxygen does it contain?

answer g

[1]

[Total: 3]

7 Kate and Steve are testing some water samples.

They use lead nitrate solution and barium chloride solution.

They add each solution to different samples of water.

Look at the table. It shows their results.

Water sample	Effect of adding lead nitrate solution	Effect of adding barium chloride solution
A	white precipitate	no reaction
B	yellow precipitate	white precipitate
C	no reaction	white precipitate

Which negative ions are in each water sample?

Explain your answers.

.....

.....

.....

.....

.....

.....

.....

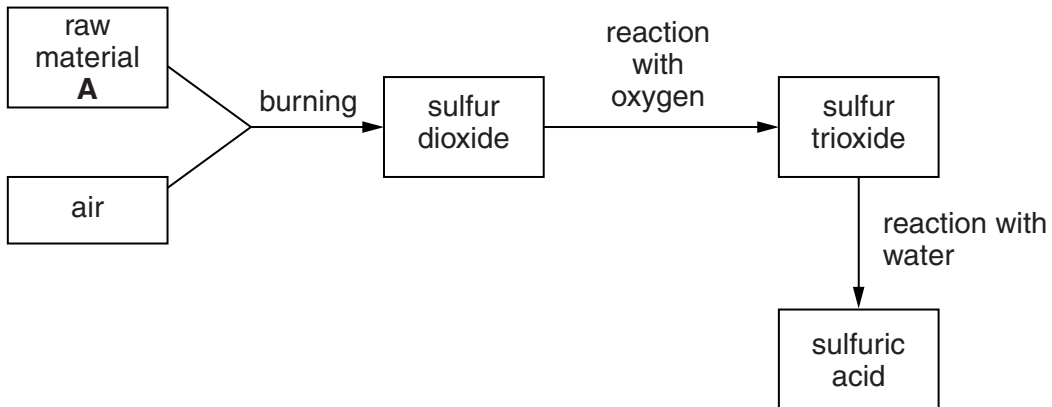
.....

..... [4]

[Total: 4]

8 This question is about the Contact Process used for the manufacture of sulfuric acid.

Look at the flow chart for the process.



(a) What is the name of raw material **A**?

..... [1]

(b) In the process, sulfur dioxide, SO_2 , reacts with oxygen, O_2 , to make sulfur trioxide, SO_3 .

Write the **balanced symbol** equation for this reaction.

..... [2]

(c) Look at the table.

It shows how the percentage yield of sulfur trioxide changes as the temperature changes.

Temperature in °C	Percentage (%) yield of sulfur trioxide
200	98
400	90
600	47
800	18
1000	5

(i) How does **decreasing** the temperature affect the percentage yield?

..... [1]

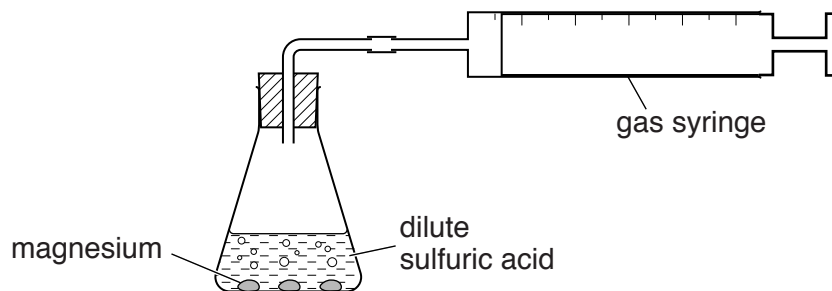
(ii) Estimate the percentage yield of sulfur trioxide at 700 °C.

answer % [1]

[Total: 5]

9 Hayley and Andy investigate the reaction between magnesium and sulfuric acid.

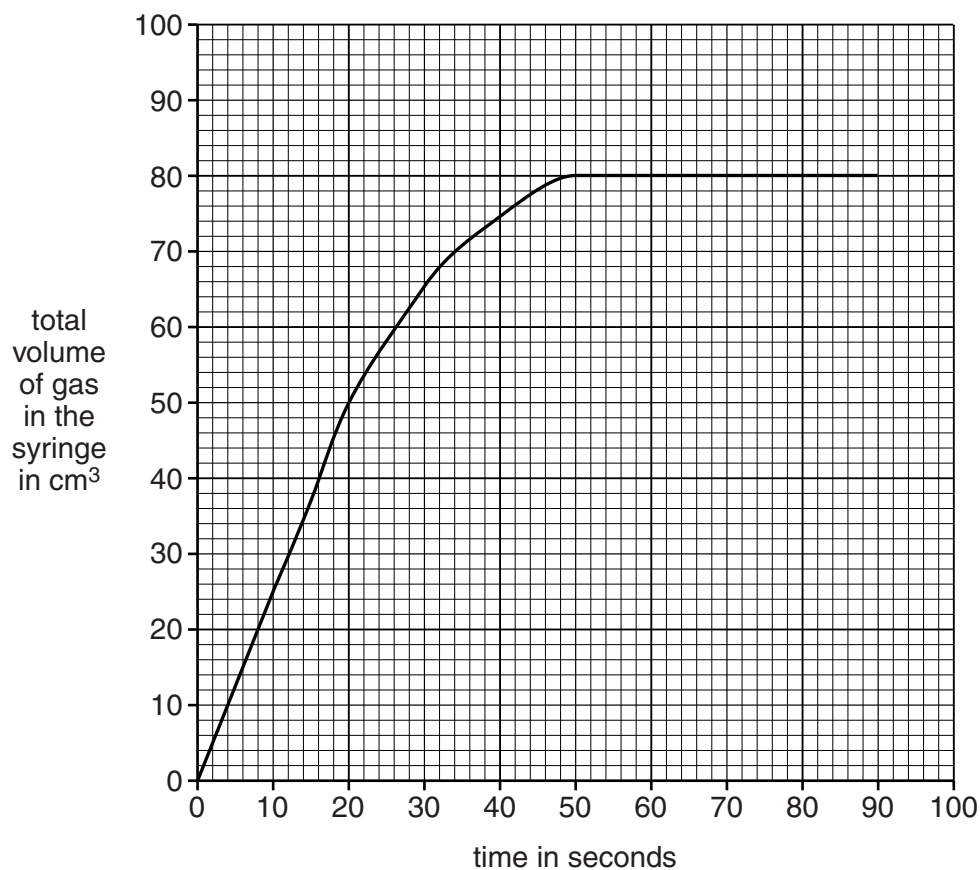
Look at the diagram. It shows the apparatus they use.



They add 0.1 g of magnesium to 50 cm³ of sulfuric acid.

They measure the total volume of gas in the syringe every 10 seconds.

Look at the graph of their results.



(a) (i) What is the total volume of gas in the syringe after 20 seconds?

answer cm³

[1]

(ii) How long does it take for the reaction to stop?

answer seconds

[1]

(b) Explain why the reaction stops.

.....
 [1]

(c) Look at the equation for the reaction.



Hayley and Andy investigate this reaction with different masses of magnesium.

They calculate the mass of sulfuric acid used and the masses of magnesium sulfate and hydrogen made.

Mass of magnesium in g	Mass of sulfuric acid in g	Mass of magnesium sulfate in g	Mass of hydrogen in g
0.50	2.04	2.50	0.04
1.00	4.08	5.00	0.08
1.50	7.50	0.12
2.00	8.16	10.00

- (i) Complete the table. [2]
- (ii) Calculate the mass of magnesium sulfate made if 10 g of magnesium completely reacts with sulfuric acid.

Explain how you worked out your answer.

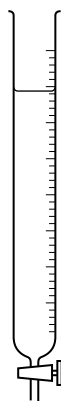
.....

 [2]

[Total: 7]

10 Stewart and Claire want to do a titration.

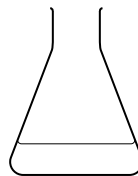
Look at the diagrams. They show some of the apparatus they use.



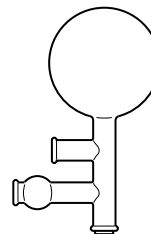
burette



pipette



flask



pipette filler

They want to titrate dilute hydrochloric acid with dilute sodium hydroxide solution.

Describe, in detail, how they do the titration. Include any safety precautions they should take.

You may wish to draw a labelled diagram to help your answer.



The quality of written communication will be assessed in your answer to this question.

..... [6]

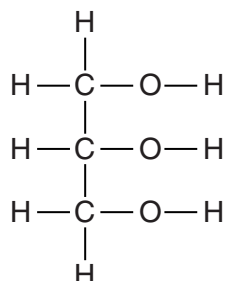
[Total: 6]

SECTION C – Module C6

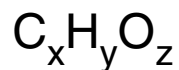
11 Fats are compounds called esters.

Fats are made by the reaction between an alcohol called glycerol and carboxylic acids.

(a) Look at the displayed formula of a molecule of glycerol.



(i) Look at the molecular formula for glycerol.



What are the numbers for **x**, **y** and **z** in the formula?

x =

y =

z =

[1]

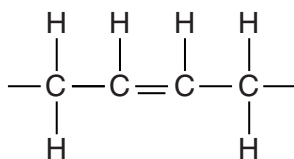
(ii) Glycerol is **not** a hydrocarbon.

How can you tell from its formula?

.....

..... [1]

(b) Look at part of the displayed formula of a fat.



The fat is **unsaturated**.

(i) How can you tell from its formula?

.....
 [1]

(ii) Dave does a chemical test to show that the fat is unsaturated.

Write about the chemical test and the result Dave gets.

.....

 [2]

(c) Write down **two** large scale uses of fats.

.....

 [2]

[Total: 7]

13 Colin investigates some displacement reactions.

He puts a small sample of metal powder into a salt solution.

Colin does five different experiments.

Look at his results.

Metal	Salt solution	Colour of solution	
		At start	At end
magnesium	iron(II) sulfate	green	colourless
iron	copper(II) sulfate	blue	green
copper	iron(II) sulfate	green	green
magnesium	copper(II) sulfate	blue	colourless
copper	silver nitrate	colourless	blue

(a) Which mixture of metal and salt solution does **not** react?

Explain your answer.

.....

.....

..... [2]

(b) Predict the order of reactivity of the metals, copper, iron, magnesium and silver.

Put the most reactive metal first.

most reactive

.....

.....

least reactive

Explain your answer.

.....

.....

.....

..... [3]

[Total: 5]

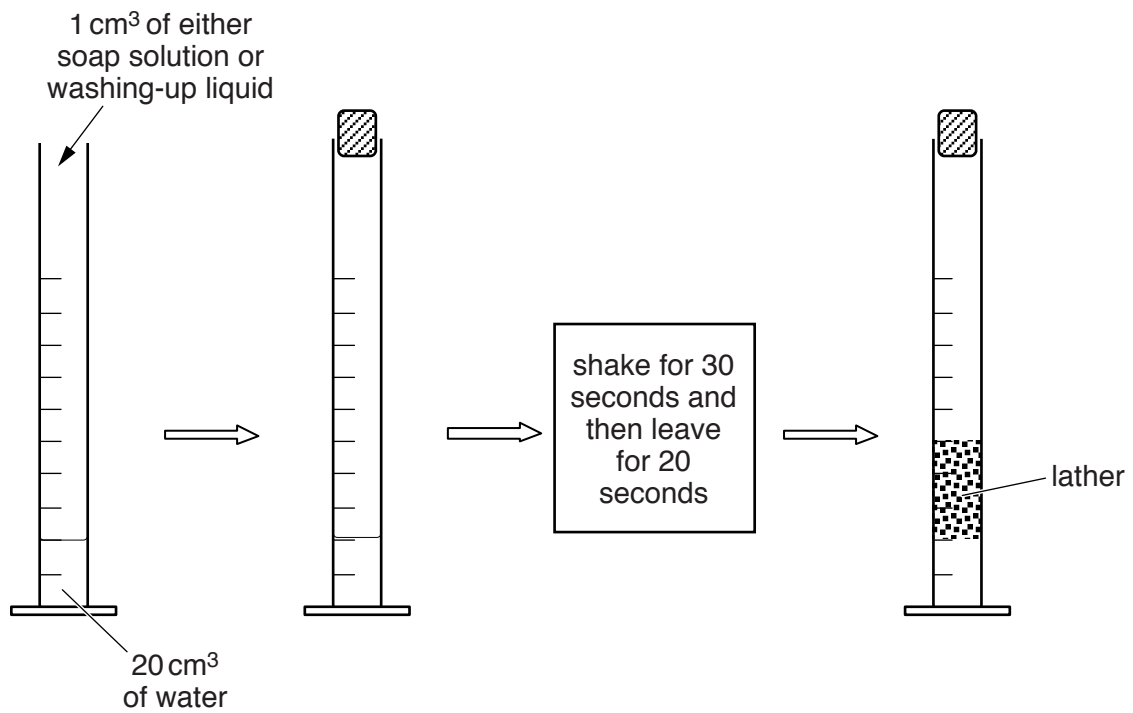
14 Magda and Sam investigate soap solution and washing-up liquid.

In their first experiment they measure out 20 cm^3 of a water sample in a measuring cylinder.

They then add 1 cm^3 of soap solution to the water sample.

Magda shakes the measuring cylinder for 30 seconds.

Sam waits 20 seconds and then measures the volume of lather in the measuring cylinder.



Magda and Sam repeat this experiment using different water samples and soap solution.

They then repeat the experiments using washing-up liquid instead of soap solution.

Look at Magda and Sam's results.

Water sample	Volume of lather with soap solution in cm ³	Volume of lather with washing-up liquid in cm ³
distilled water	30	60
water with only permanent hardness	5	60
water with only temporary hardness	10	60
salt water	25	60

Before she did the experiment, Magda predicted that water hardness affects the action of **both** soap **and** of washing-up liquid.

Is this prediction supported by the results?

Explain your answer quoting data from the results table.

.....

.....

.....

.....

.....

..... [2]

[Total: 2]

15 Molten (liquid) salts can be electrolysed.

(a) Molten (liquid) potassium chloride can be electrolysed.

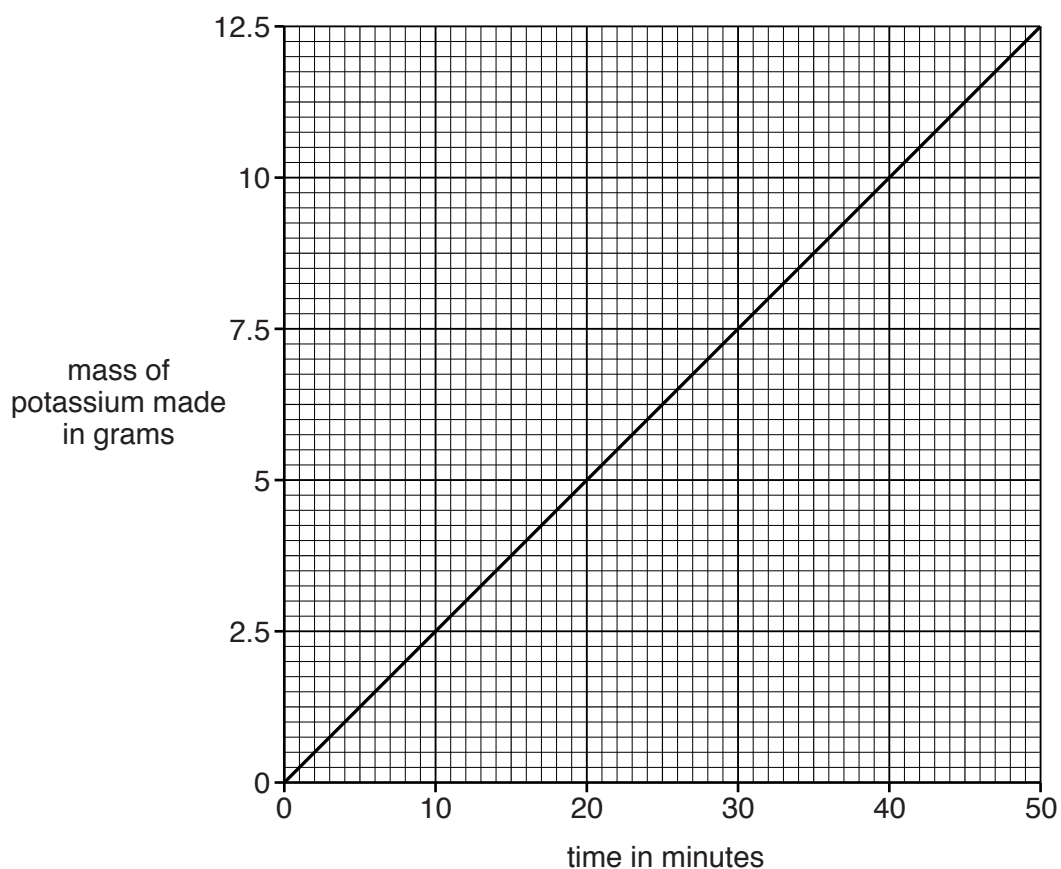
It makes potassium.

Sanjay investigates the mass of potassium made when molten potassium chloride is electrolysed.

He always uses a current of 10.3 amps.

He changes how long, in minutes, he does the electrolysis.

Look at the graph of his results.



(i) What mass of potassium is made after 30 minutes?

..... g

[1]

(ii) Sanjay electrolyses molten potassium chloride for 300 minutes.

Predict the mass of potassium made.

..... g

[1]

(b) Sanjay does an electrolysis experiment using potassium bromide.

Solid potassium bromide cannot be electrolysed.

Molten (liquid) potassium bromide can be electrolysed. It makes two products.

(i) Write down the names of the **two** products made during this electrolysis.

.....
..... [2]

(ii) Explain why molten (liquid) potassium bromide can be electrolysed.

.....
.....
..... [1]

[Total: 5]

SECTION D

16 Farmers use fertilisers to improve crop yield.

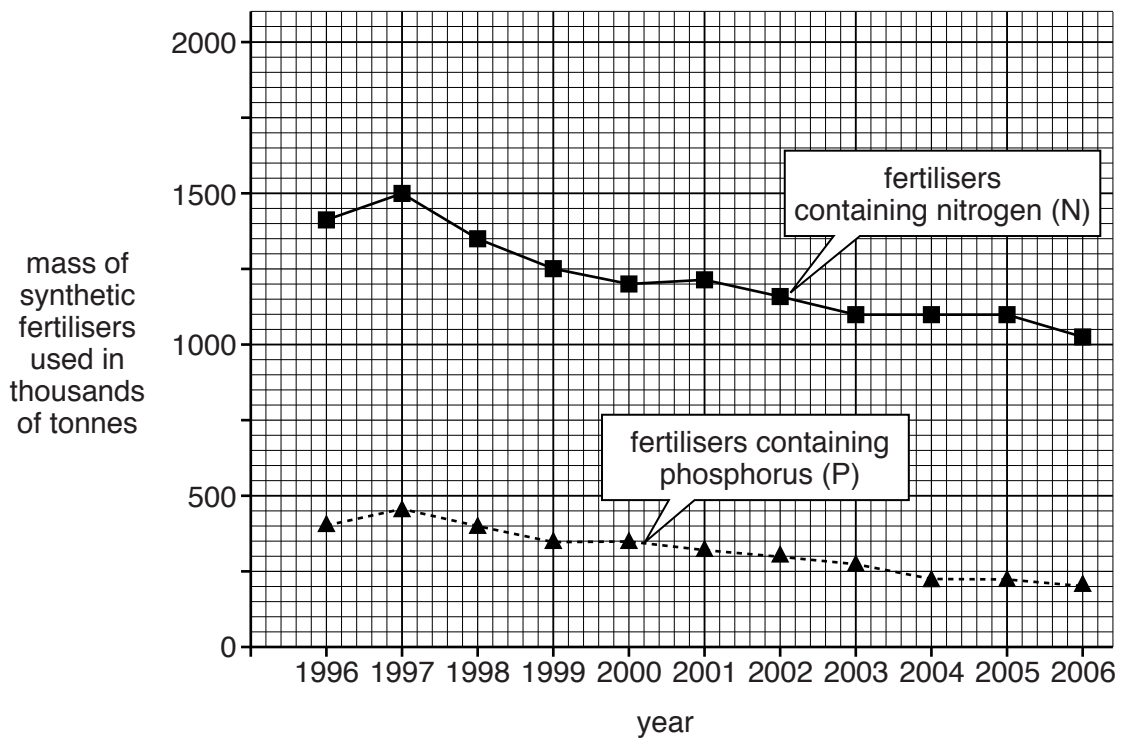
Fertilisers contain one or more of the three essential elements.

These essential elements are nitrogen, phosphorus and potassium.

Fertilisers made in factories are called **synthetic** fertilisers.

(a) Look at the graph.

It shows the use of some synthetic fertilisers in the UK between 1996 and 2006.



(i) What mass of fertilisers containing **nitrogen** was used in 1997?

..... thousands of tonnes [1]

(ii) Describe the general trend in the use of these synthetic fertilisers in the UK from 1996 to 2006.

..... [1]

(b) Look at the graph.

It shows the use of synthetic fertilisers in the world between the years 1950 and 2010.

Adapted from Dr J Floor Anthoni, Soil Fertility 2, 2000, www.seafriends.org.nz/enviro/soil/fertile2. Item removed due to copyright restrictions.



Use the graphs in (a) and (b) to **compare** the use of synthetic fertilisers in the UK and the world.

.....

.....

.....

.....

.....

.....

.....

.....

..... [3]

(c) Farmers also use **pesticides** to increase crop yield.

Pesticides kill pests such as insects which eat the crops.

Look at the table. It shows the use of synthetic fertilisers and pesticides in some countries.

Country	Mass of synthetic fertilisers used in 1 km ² in kg	Mass of pesticides used in 1 km ² in kg
A	39 000	5100
B	59 000	200
C	45 000	900
D	8 000	500
E	6 000	200

(i) Some people want to buy organic vegetables.

Organic vegetables must be grown **without** the use of synthetic fertilisers and pesticides.

From the information in the table, suggest a country, **A**, **B**, **C**, **D** or **E** which grows lots of organic vegetables.

Explain your answer.

.....

.....

.....

..... [2]

(ii) The land area of country **B** is 7 000 000 km².

Calculate the mass of **pesticides** used in country **B**.

.....

.....

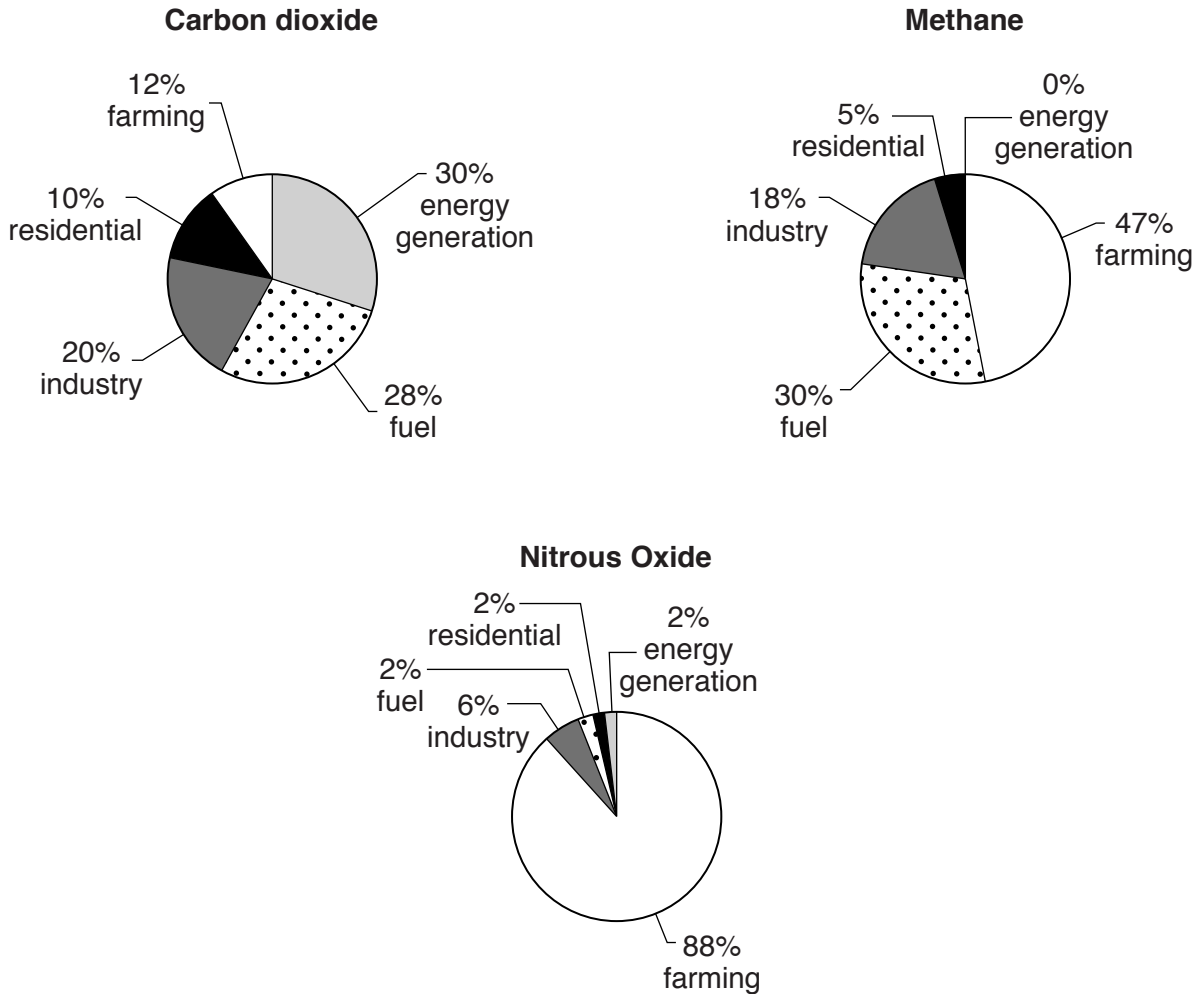
.....

mass of pesticides = kg [1]

(d) The use of synthetic fertilisers also contributes towards the greenhouse effect.

Look at the pie charts about three greenhouse gases.

They show where these greenhouse gases come from.



Suggest which gas is most likely to be made from the use of synthetic fertilisers.

Choose from carbon dioxide, methane or nitrous oxide.

How can you tell?

.....

.....

.....

.....

.....

..... [2]

[Total: 10]

ADDITIONAL ANSWER SPACE

If additional space is required, you should use the following lined page(s). The question number(s) must be clearly shown in the margins.

A large area of lined paper for writing answers. It features a vertical margin line on the left side and horizontal dotted lines for writing. The lines are evenly spaced and extend across the width of the page.

A large area of the page is reserved for writing, featuring a vertical solid line on the left side and horizontal dotted lines extending across the page.



Copyright Information

OCR is committed to seeking permission to reproduce all third-party content that it uses in its assessment materials. OCR has attempted to identify and contact all copyright holders whose work is used in this paper. To avoid the issue of disclosure of answer-related information to candidates, all copyright acknowledgements are reproduced in the OCR Copyright Acknowledgements Booklet. This is produced for each series of examinations and is freely available to download from our public website (www.ocr.org.uk) after the live examination series.

If OCR has unwittingly failed to correctly acknowledge or clear any third-party content in this assessment material, OCR will be happy to correct its mistake at the earliest possible opportunity.

For queries or further information please contact the Copyright Team, First Floor, 9 Hills Road, Cambridge CB2 1GE.

OCR is part of the Cambridge Assessment Group; Cambridge Assessment is the brand name of University of Cambridge Local Examinations Syndicate (UCLES), which is itself a department of the University of Cambridge.

The Periodic Table of the Elements

	1	2	3	4	5	6	7	0										
	7 Li lithium 3	9 Be beryllium 4	11 Na sodium 11	12 Mg magnesium 12	13 Al aluminium 13	14 Si silicon 14	15 P phosphorus 15	16 S sulfur 16	17 Cl chlorine 17	18 Ar argon 18								
	19 K potassium 19	20 Ca calcium 20	21 Sc scandium 21	22 Ti titanium 22	23 V vanadium 23	24 Cr chromium 24	25 Mn manganese 25	26 Fe iron 26	27 Co cobalt 27	28 Ni nickel 28	29 Cu copper 29	30 Zn zinc 30	31 Ga gallium 31	32 Ge germanium 32	33 As arsenic 33	34 Se selenium 34	35 Br bromine 35	36 Kr krypton 36
	37 Rb rubidium 37	38 Sr strontium 38	39 Y yttrium 39	40 Zr zirconium 40	41 Nb niobium 41	42 Mo molybdenum 42	43 Tc technetium 43	44 Ru ruthenium 44	45 Rh rhodium 45	46 Pd palladium 46	47 Ag silver 47	48 Cd cadmium 48	49 In indium 49	50 Sn tin 50	51 Sb antimony 51	52 Te tellurium 52	53 I iodine 53	54 Xe xenon 54
	55 Cs caesium 55	56 Ba barium 56	57 La* lanthanum 57	72 Hf hafnium 72	73 Ta tantalum 73	74 W tungsten 74	75 Re rhenium 75	76 Os osmium 76	77 Ir iridium 77	78 Pt platinum 78	79 Au gold 79	80 Hg mercury 80	81 Tl thallium 81	82 Pb lead 82	83 Bi bismuth 83	84 Po polonium 84	85 At astatine 85	86 Rn radon 86
	[223] Fr francium 87	[226] Ra radium 88	[227] Ac* actinium 89	[261] Rf rutherfordium 104	[262] Db dubnium 105	[266] Sg seaborgium 106	[264] Bh bohrium 107	[277] Hs hassium 108	[268] Mt meitnerium 109	[271] Ds darmstadtium 110	[272] Rg roentgenium 111	Elements with atomic numbers 112-116 have been reported but not fully authenticated						

1 H hydrogen 1

relative atomic mass atomic symbol name atomic (proton) number

* The lanthanoids (atomic numbers 58-71) and the actinoids (atomic numbers 90-103) have been omitted.

The relative atomic masses of copper and chlorine have not been rounded to the nearest whole number.